

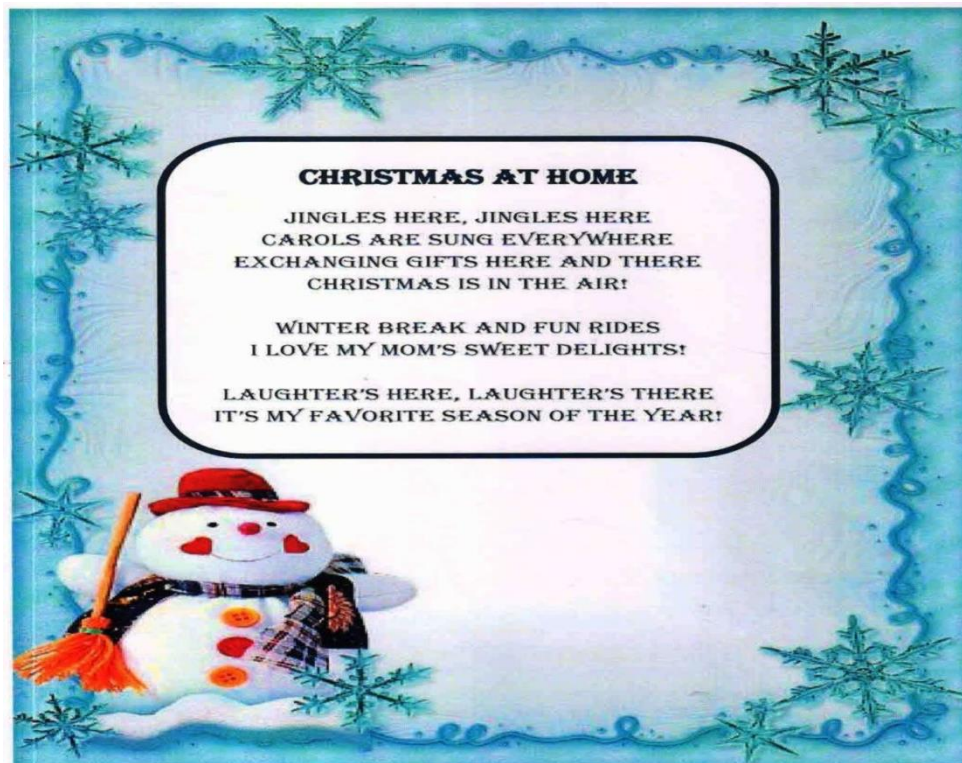
**HARDAYAL PUBLIC SCHOOL, BAHADURGARH**  
**WINTER HOLIDAYS HOMEWORK**

Dear Child,

Holidays are an integral part of a student's life. It's a time for fun, a time to explore and a time to learn in different ways. When holidays are given a meaningful direction, it results in a productive and enjoyable time. Let's use these holidays to pursue some hobbies and apply our minds creatively to learn new things and to bring a new change in the environment in our own individual way.























**Instructions-**

- ❖ Take the help of your parents when necessary.
- ❖ The written part should be neatly presented in your own handwriting.
- ❖ Do reading and writing practice daily.
- ❖ Kindly bring the holidays homework duly completed on the first working day after holidays.



**HAPPY HOLIDAYS**

1. Fill in the blanks with correct opposite:

|  |   |   |   |
|--|---|---|---|
|           |  |   |    |
| The door is _____  | The door is _____   | The bear sits on the _____  | The bunny sits on the _____   |
|           |  |   |    |
| The light is _____   | The light is _____  | The ball is _____ the box.  | The ball is _____ the box.  |
|           |  |   |    |
| The boy is _____   | The boy is _____  | The fire is _____   | The ice is _____  |
|           |  |   |    |
| The child is _____   | The child is _____  | The ocean is _____  | The brook is _____  |
|           |  |    |    |
| The fairy is _____   | The witch is _____  | The honey is _____  | The lemon is _____  |
| asleep / awake<br>shallow / deep<br>left / right<br>sweet / sour<br>on / off<br>hot / cold | good / evil<br>empty / full<br>in / out of<br>open / closed<br>sick / healthy     |  |  |
|  |   | The glass is _____  | The glass is _____  |

Q2. Look at the picture and identify which festival is been celebrated by the children? Also, write 4 sentences about it.



\_\_\_\_\_

\_\_\_\_\_

\_\_\_\_\_

\_\_\_\_\_

**Q3. Read the following lines and answer the given questions-**

**The New Bicycle**

Emma has a new bicycle. It is bright, pink and shiny. It was a gift from her uncle. He hid it behind a bush to surprise her. When Emma saw the bicycle, she jumped with joy. She gave her uncle a big hug and thanked him. She loves her new bicycle.

**a) How is Emma's new bicycle?**

\_\_\_\_\_

**b) Where was the bicycle hidden?**

\_\_\_\_\_

**c) Write any two-**

1) **Naming words** \_\_\_\_\_

2) **Describing words** \_\_\_\_\_

3) **Action words** \_\_\_\_\_

**c) Who gifted the bicycle?**


\_\_\_\_\_



Prepositions

**Look at the picture. Fill in the blanks with correct prepositions from the box.**

at on in near behind under



1. The cat is \_\_\_\_\_ the table.

2. The mouse is \_\_\_\_\_ the table.

3. There is a bowl \_\_\_\_\_ the table.


4. The mouse \_\_\_\_\_ the bowl.

5. There is cheese \_\_\_\_\_ the bowl.

6. The dog is \_\_\_\_\_ the door.

# EVS Worksheet

Fill in the blanks with the help of suitable pictures from below :

1. The \_\_\_\_\_ gives us medicines.
2. We drop our letters in the \_\_\_\_\_.
3. The \_\_\_\_\_ grows crops for us.
4. A \_\_\_\_\_ uses 
5. The \_\_\_\_\_ catches thieves.



Part 1: Look at the pictures. Write down the names of the jobs.

a dentist   a nurse   a bus driver   a teacher  
a doctor   a policeman   a postman   a fireman



\_\_\_\_\_



\_\_\_\_\_

\_\_\_\_\_

\_\_\_\_\_

\_\_\_\_\_

Matching Time



Mobile phone

Book

Newspaper

Magazine

Television

Radio







Telephone

Letter

Computer



. Activity Time ( Draw the Weather)

|  |   |
|--|---|
|                               | <p>1. Today it's sunny</p>    |
| <p>2. Today it's windy</p>    | <p>3. Today it's cloudy</p>  |
| <p>4. Today it's rainy</p>  | <p>5. Today it's snowy</p>  |

Maths

1. Learn tables 2 to 9 thoroughly on daily basis.

2. Unit Test IV (Syllabus)

\*Chapter-4 ( Multiplication)

\*Chapter – 8 (Measurement)

\*Chapter-11(Data Handling)

**NOTE – Do written practice for Unit Test IV in Homework Notebook.**

**WORKSHEET**

**Q-1. Fill in the blanks :**

a)  $7 \times 5 = \underline{\quad}$

d)  $9 \times \underline{\quad} = 81$

b)  $\underline{\quad} \times 5 = 30$

e)  $\underline{\quad} \times 6 = 54$

c)  $8 \times \underline{\quad} = 24$

f)  $5 \times 8 = \underline{\quad}$

**Q-2. Match the following :**

- |                            |                 |
|----------------------------|-----------------|
| a) $3 + 3 + 3$             | 1) $6 \times 9$ |
| b) $4 + 4 + 4$             | 2) $4 \times 7$ |
| c) $7 + 7 + 7 + 7$         | 3) $3 \times 3$ |
| d) $2 + 2 + 2 + 2 + 2$     | 4) $3 \times 4$ |
| e) $9 + 9 + 9 + 9 + 9 + 9$ | 5) $5 \times 2$ |

**Q-3. Solve the following :**

- |                          |                         |
|--------------------------|-------------------------|
| a) Double of 3 is _____  | e) Double of 2 is _____ |
| b) Double of 10 is _____ | f) Double of 6 is _____ |

**Q-4. Fill in the blanks :**

- |              |              |              |              |
|--------------|--------------|--------------|--------------|
| a) $1 \ 2$   | b) $1 \ 3$   | c) $2 \ 4$   | d) $5 \ 0$   |
| $\times \ 3$ | $\times \ 2$ | $\times \ 2$ | $\times \ 4$ |
| _____        | _____        | _____        | _____        |
| _____        | _____        | _____        | _____        |

**Q-5. How would you measure the following ? Write in m or cm .**

- |                                |                                 |
|--------------------------------|---------------------------------|
| a) Length of a math book _____ | b) Height of a pole _____       |
| c) Length of a train _____     | d) Length of a blackboard _____ |
| e) Length of a wall _____      | f) Length of a saree _____      |

**Q-6 . Write 'more than' OR 'less than' to complete the sentences :**

- a) A bowl can hold \_\_\_\_\_ a mug.  
b) A bucket can hold \_\_\_\_\_ a drum.  
c) A bottle can hold \_\_\_\_\_ a spoon.  
d) A glass can hold \_\_\_\_\_ a tub.  
e) A tin can hold \_\_\_\_\_ a jug





**Q-7. Which standard units of weight ( g or kg ) will you use to measure the following :**

- |                        |                       |
|------------------------|-----------------------|
| a) A tooth brush _____ | b) 8 apples _____     |
| c) A bag of rice _____ | d) one banana _____   |
| e) An elephant _____   | f) A small book _____ |

**Q-8. Which standard units of weight ( g or kg ) will you use to measure the following :**

- |                        |                       |
|------------------------|-----------------------|
| a) A tooth brush _____ | f) 8 apples _____     |
| b) A bag of rice _____ | g) one banana _____   |
| c) An elephant _____   | h) A small book _____ |

**Q9. Aman interviews his classmates and made a list on how each of them comes to school. Here is what he found.**

|         |   |
|---------|---|
| Bus     |  |
| Cycle   |  |
| Car     |  |
| On foot |  |
|         |   |

**Answer the following questions:**

Q1. Which mode is least preferred by students?

Ans. \_\_\_\_\_

Q2. Which mode is most preferred by students?

Ans. \_\_\_\_\_

Q3. How many students come to school by car?

Ans. \_\_\_\_\_

Q4. How many students are there in his class ?

Ans. \_\_\_\_\_

हिंदी

साहित्य 11 पाठ - (उत्कर्ष)-वाक्य बनाओ व कठिन ,उत्तर-प्रश्न, तक पढ़े और शब्दार्थ 13 श्रुतलेख लखो व 10 पता की मदद से पुस्तक में से-अपने माता |शब्दों का अभ्यास करें |सुधार कार्य भी करो|अंक भी लो

व्याकरण - विशेषण, क्रया,समानार्थी शब्द, वलोम शब्द और गनती(20-40) का अभ्यास करें इकाई परीक्षा-4 हेतु।

प्रश्न - 1. नीचे लिखे गद्यांश को पढ़ो , पूछे गए प्रश्नों के उत्तर दो -



मेरा नाम मीना है। गर्मी के दिनों में मौसा-मौसी जी हमारे घर रहने आए थे। उनकी बेटी का नाम सिया था। बेटे का नाम सौरभ था। वह बहुत शरारती था। हमारी कामवाली का नाम गौरी था। वह सबके लिए चाय लेकर आई। एक दिन अचानक बरसात होने से मौसम बहुत सुहाना हो गया था। मैं, मेरी बहन सिया, मौसी और सौरभ के साथ छत पर खेलने गई। हम सब ने बरसात में बहुत मजा किया। शाम को पिताजी हम सब के लिए कचोरी और समोसा लेकर आए। सिया को कचौड़ी बहुत पसंद थी।

1- मीना के घर कौन रहने आया था ?

---

2- सबके लए चाय लेकर लेकर कौन आया ?

---

3- मीना कसके साथ छत पर खेलने गई ?

---

4- मीना के पताजी क्या लेकर आए ?

---

5- कचौड़ी कसको पसंद थी ?

---

प्रश्न -2. चित्र को देखो ,चित्र में क्या हो रहा है अपने शब्दों में लिखिए।



---

---

---

---

---

प्रश्न -3. दिए गए विषयों में से किसी एक पर अनुच्छेद लिखो -

1.होली

2. सर्दी का मौसम

3. मेरा परिवार

---